

© International Baccalaureate Organization 2023

All rights reserved. No part of this product may be reproduced in any form or by any electronic or mechanical means, including information storage and retrieval systems, without the prior written permission from the IB. Additionally, the license tied with this product prohibits use of any selected files or extracts from this product. Use by third parties, including but not limited to publishers, private teachers, tutoring or study services, preparatory schools, vendors operating curriculum mapping services or teacher resource digital platforms and app developers, whether fee-covered or not, is prohibited and is a criminal offense.

More information on how to request written permission in the form of a license can be obtained from <https://ibo.org/become-an-ib-school/ib-publishing/licensing/applying-for-a-license/>.

© Organisation du Baccalauréat International 2023

Tous droits réservés. Aucune partie de ce produit ne peut être reproduite sous quelque forme ni par quelque moyen que ce soit, électronique ou mécanique, y compris des systèmes de stockage et de récupération d'informations, sans l'autorisation écrite préalable de l'IB. De plus, la licence associée à ce produit interdit toute utilisation de tout fichier ou extrait sélectionné dans ce produit. L'utilisation par des tiers, y compris, sans toutefois s'y limiter, des éditeurs, des professeurs particuliers, des services de tutorat ou d'aide aux études, des établissements de préparation à l'enseignement supérieur, des fournisseurs de services de planification des programmes d'études, des gestionnaires de plateformes pédagogiques en ligne, et des développeurs d'applications, moyennant paiement ou non, est interdite et constitue une infraction pénale.

Pour plus d'informations sur la procédure à suivre pour obtenir une autorisation écrite sous la forme d'une licence, rendez-vous à l'adresse <https://ibo.org/become-an-ib-school/ib-publishing/licensing/applying-for-a-license/>.

© Organización del Bachillerato Internacional, 2023

Todos los derechos reservados. No se podrá reproducir ninguna parte de este producto de ninguna forma ni por ningún medio electrónico o mecánico, incluidos los sistemas de almacenamiento y recuperación de información, sin la previa autorización por escrito del IB. Además, la licencia vinculada a este producto prohíbe el uso de todo archivo o fragmento seleccionado de este producto. El uso por parte de terceros —lo que incluye, a título enunciativo, editoriales, profesores particulares, servicios de apoyo académico o ayuda para el estudio, colegios preparatorios, desarrolladores de aplicaciones y entidades que presten servicios de planificación curricular u ofrezcan recursos para docentes mediante plataformas digitales—, ya sea incluido en tasas o no, está prohibido y constituye un delito.

En este enlace encontrará más información sobre cómo solicitar una autorización por escrito en forma de licencia: <https://ibo.org/become-an-ib-school/ib-publishing/licensing/applying-for-a-license/>.

Sports, exercise and health science

Standard level

Paper 3

2 May 2023

Zone A afternoon | Zone B morning | Zone C morning

Candidate session number

--	--	--	--	--	--	--	--	--	--

1 hour

Instructions to candidates

- Write your session number in the boxes above.
- Do not open this examination paper until instructed to do so.
- Answer all of the questions from two of the options.
- Answers must be written within the answer boxes provided.
- A calculator is required for this paper.
- The maximum mark for this examination paper is **[40 marks]**.

Option	Questions
Option A — Optimizing physiological performance	1 – 4
Option B — Psychology of sports	5 – 9
Option C — Physical activity and health	10 – 13
Option D — Nutrition for sports, exercise and health	14 – 17



Option A — Optimizing physiological performance

1. Cold-water immersion (CWI) is commonly used for post-exercise recovery. A study looked at the effects of CWI on athletes' muscle damage indicators following completion of a triathlon (3.86 km swim, 180.25 km cycle and 40.2 km run).

The measured variables were:

- creatine kinase
- myoglobin
- cortisol
- perceived delayed onset muscle soreness (DOMS).

Measurements were taken:

- pre-event
- immediately post-event
- 16 hours post-event
- 40 hours post-event.

Figure 1: Data for the cold-water immersion and control groups before and after the triathlon event

Removed for copyright reasons

(This question continues on the following page)



20EP02

(Option A, question 1 continued)

Removed for copyright reasons

Group comparisons revealed the following t-test results at 16 hours post-event:

creatine kinase: $p > 0.05$

myoglobin: $p > 0.05$

cortisol: $p > 0.05$

DOMS: $p < 0.05$

(This question continues on the following page)



20EP03

Turn over

(Option A, question 1 continued)

- (a) Identify the group that had the lowest levels of creatine kinase after the triathlon event. [1]

.....
.....

- (b) Calculate the difference in perceived DOMS score at 16 hours post-event between the cold-water immersion group and the control group. [2]

.....
.....
.....
.....

- (c) Using the data from this study, discuss whether there is any real or perceived benefit for an athlete who completes cold-water immersion as part of exercise recovery. [3]

.....
.....
.....
.....
.....
.....

(Option A continues on the following page)



(Option A continued)

2. (a) State the normal physiological core body temperature. [1]

.....
.....

- (b) The Kona iron man event takes place in a hot climate. Athletes typically undergo heat acclimatization as part of their training to aid their performance.

Discuss the physiological adaptations that will occur for an athlete as a result of undergoing heat acclimatization. [3]

.....
.....
.....
.....
.....
.....

3. (a) Outline how a triathlete could use fartlek training to improve their endurance capability. [2]

.....
.....
.....
.....

(This question continues on the following page)



(Option A, question 3 continued)

- (b) Suggest how a triathlete should approach the pre-season phase of their training to maximize performance. [3]

.....

.....

.....

.....

.....

.....

- 4. (a) Using a sporting example, describe how a substance could have a placebo effect on an athlete's performance. [2]

.....

.....

.....

.....

- (b) Erythropoietin (EPO) is a substance banned by the International Olympic Committee (IOC). State **one** other class of non-nutritional ergogenic aid that is banned by the IOC. [1]

.....

.....

- (c) Evaluate an athlete's physiological response to using EPO. [2]

.....

.....

.....

.....

End of Option A



20EP06

Option B — Psychology of sports

5. A study investigated the role of trait emotional intelligence (trait EI) on mood states and serum cortisol responses during an 80.5 km treadmill ultramarathon. Participants with low trait EI were compared to those with high trait EI. All participants were matched for aerobic capacity and running ability.

Results were recorded at:

- baseline (2 weeks prior to the treadmill run)
- pre-run (30 minutes prior to the treadmill run)
- halfway (through the treadmill run)
- post-run (immediately on completion of the treadmill run).

Table 1: Measured variables (mean ± SD) for low and high trait EI groups

Removed for copyright reasons

- (a) Identify the time period and variable that showed the greatest significant difference. [1]

.....
.....

(This question continues on the following page)



(Option B, question 5 continued)

- (b) Calculate the difference in mean mood state between low and high trait EI for the post-run time period.

[2]

.....

.....

.....

.....

- (c) Analyse the measured differences in cortisol and mood state between the low and high trait EI groups during the study.

[3]

.....

.....

.....

.....

.....

.....

(Option B continues on the following page)



(Option B continued)

6. (a) Define the term *personality*. [1]

.....
.....

(b) State **one** method for measuring personality. [1]

.....
.....

(c) Discuss the interactionist approach to personality. [2]

.....
.....
.....
.....

7. (a) Describe the inverted-U hypothesis as it relates to sports performance. [2]

.....
.....
.....
.....

(This question continues on the following page)



(Option B, question 7 continued)

- (b) Using an example, discuss the positive emotions that characterize an athlete's experience.

[3]

.....

.....

.....

.....

.....

.....

- 8. Describe how an athlete could use different types of goals to maximize their performance.

[2]

.....

.....

.....

.....

- 9. Using an example, discuss the issues that can arise for an athlete using extrinsic motivators.

[3]

.....

.....

.....

.....

.....

.....

End of Option B

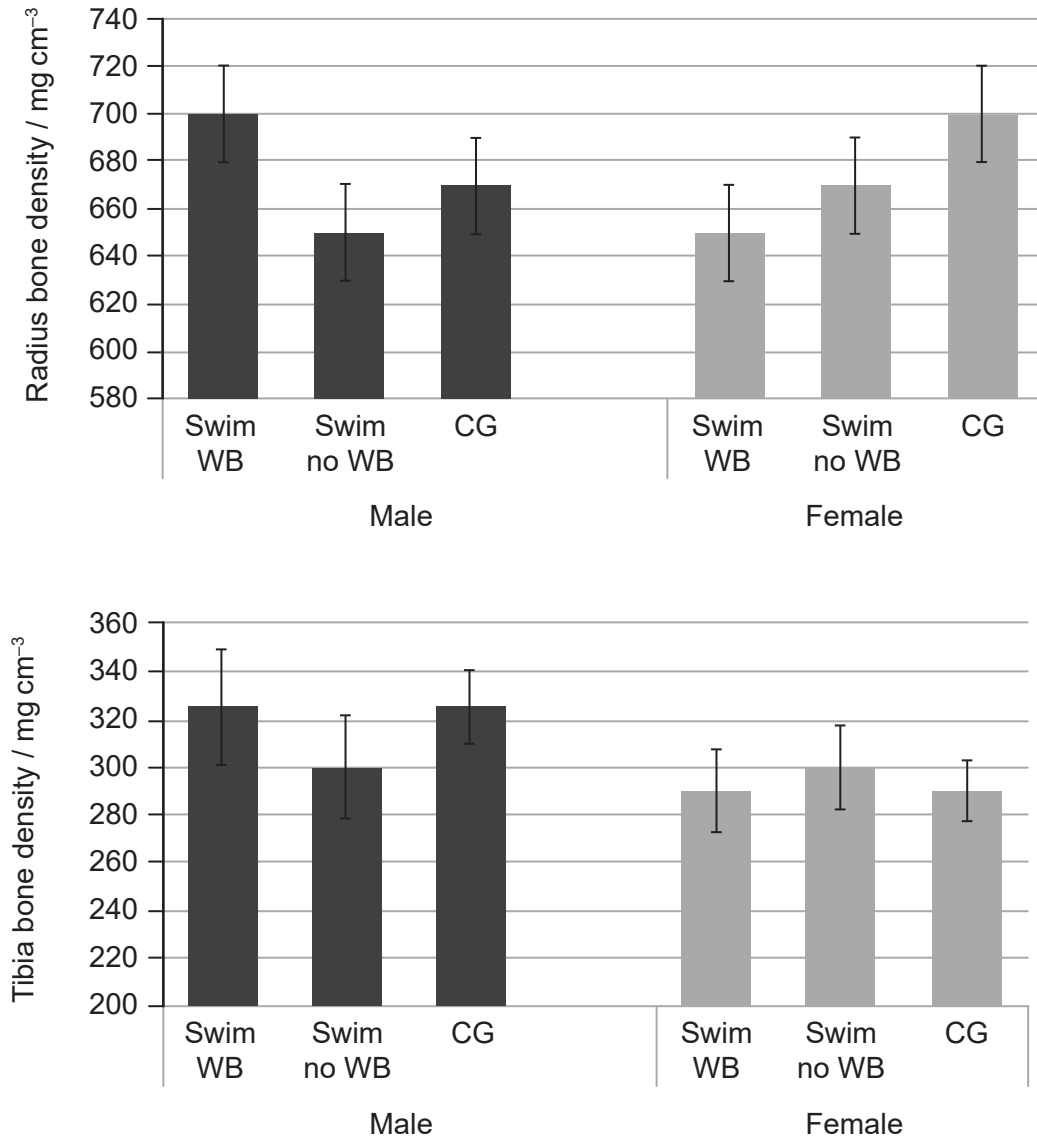


20EP10

Option C — Physical activity and health

10. A study investigated how mode of exercise can influence the bone density of adolescents. Three groups were identified and had their bone density measured for comparison:
- Swim WB (swimmers who also take part in weight-bearing sports).
 - Swim no WB (swimmers who do not take part in weight-bearing sports).
 - CG (control group – non-swimmers who take part in weight-bearing sports).

Figure 2: Bone density of the radius and tibia for males and females in each group



(a) Identify the male group that had the highest bone density for both bones. [1]

.....

.....

(This question continues on the following page)



20EP11

Turn over

(Option C, question 10 continued)

- (b) Calculate the difference in tibia bone density between the female swim no WB group and the female CG group. [2]

.....

.....

.....

.....

- (c) Discuss the hypothesis that weight-bearing exercises are more beneficial for developing a person's bone density than non-weight-bearing exercises. [3]

.....

.....

.....

.....

.....

.....

(Option C continues on the following page)



(Option C continued)

11. (a) Outline osteoporosis. [1]

.....
.....

(b) Discuss the risk factors for osteoporosis. [3]

.....
.....
.....
.....
.....
.....

(c) Identify **two** health consequences of obesity. [2]

.....
.....
.....
.....

(Option C continues on page 15)



Please **do not** write on this page.

Answers written on this page
will not be marked.



20EP14

(Option C continued)

12. (a) In some countries, a doctor may write a “green prescription” to encourage the patient to be physically active as part of their health management.

Outline the importance of exercise for individuals with a hypokinetic disease. [3]

.....

.....

.....

.....

.....

.....

- (b) Discuss potential physiological and psychological barriers encountered by individuals planning to engage in physical activity. [3]

.....

.....

.....

.....

.....

.....

13. Outline how an appropriate amount of exercise can enhance an individual’s psychological well-being. [2]

.....

.....

.....

.....

End of Option C



20EP15

Turn over

Option D — Nutrition for sports, exercise and health

14. A study investigated the effect of sodium bicarbonate (NaHCO_3) ingestion on the performance of elite BMX cyclists during simulated competition. Participants ingested either NaHCO_3 or a placebo 90 minutes before exercise. They completed three races (R1, R2 and R3). Oxygen uptake (VO_2) and pulmonary ventilation (VE) were measured before (pre-) and after (post-) each race. Race time, peak velocity and peak heart rate were also recorded.

Figure 3(a): Mean oxygen uptake

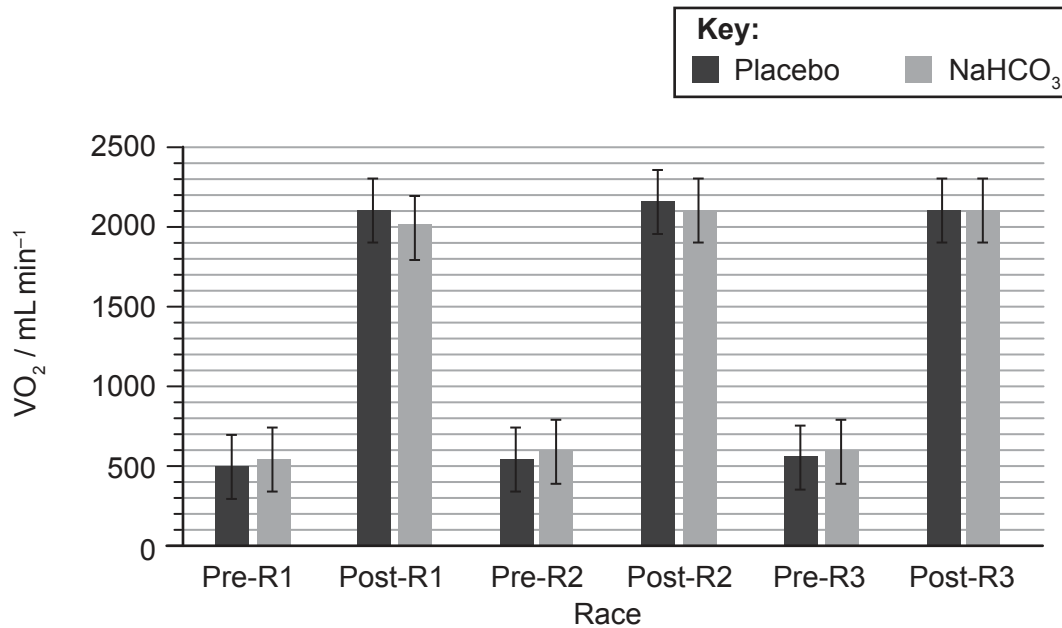
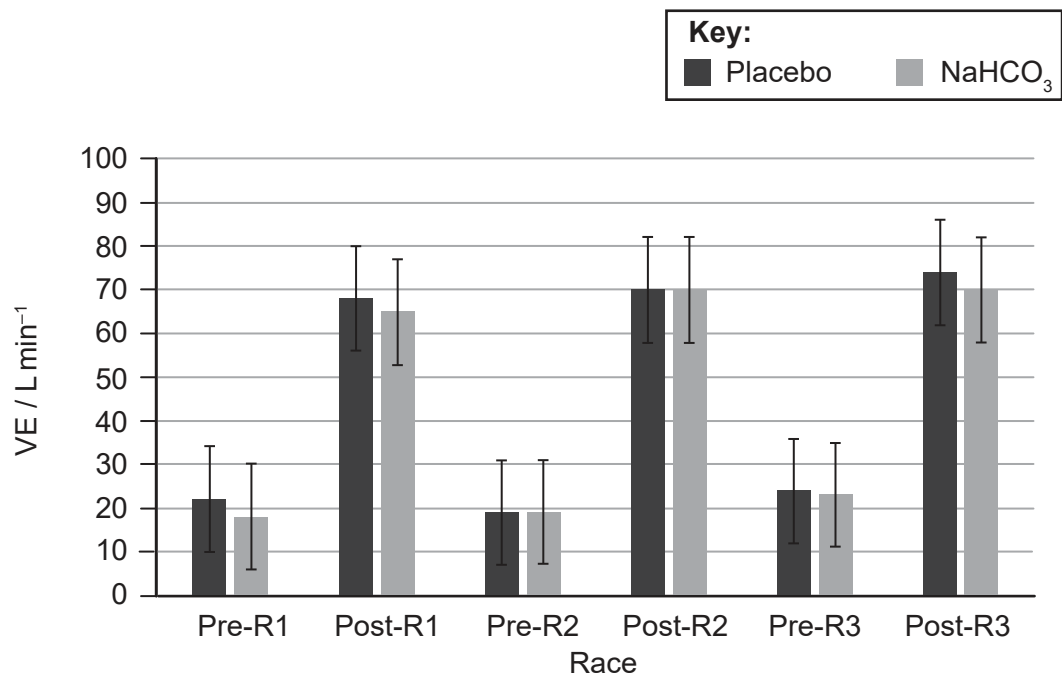


Figure 3(b): Mean pulmonary ventilation



(This question continues on the following page)



20EP16

(Option D, question 14 continued)

Table 2: Mean results for race time, peak velocity and peak heart rate for the three races

Measurement	Condition	Race 1	Race 2	Race 3
Race time / s	NaHCO ₃	31.42	31.31	31.39
	Placebo	31.46	31.18	31.33
Peak velocity / m s ⁻¹	NaHCO ₃	12.95	12.86	12.90
	Placebo	13.05	12.80	13.13
Peak heart rate / bpm ⁻¹	NaHCO ₃	194	194	191
	Placebo	194	193	190

$p = >0.05$ for each comparison

(a) Describe the trend for mean pulmonary ventilation before (pre) and after (post) each race. [1]

.....

.....

(b) Calculate the difference in oxygen uptake (VO₂) between the placebo and the sodium bicarbonate (NaHCO₃) conditions after Race 1 (post-R1). [2]

.....

.....

.....

.....

(This question continues on the following page)



(Option D, question 14 continued)

- (c) Using the data in **Table 2**, discuss the hypothesis that the consumption of a buffer such as sodium bicarbonate (NaHCO_3) can enhance human exercise performance. [3]

.....

.....

.....

.....

.....

.....

- 15.** (a) State the typical pH values found in an athlete's stomach. [1]

.....

.....

- (b) Athletes consume various nutritional ergogenic aids, such as sodium bicarbonate, in the belief that they will enhance their performance.

Evaluate **one other** nutritional ergogenic aid that is commonly used by athletes. [3]

.....

.....

.....

.....

.....

.....

(Option D continues on the following page)



(Option D continued)

16. (a) Identify **two** reasons why water is critical for normal human functioning. [2]

.....

.....

.....

.....

(b) Explain why a marathon runner would require a greater water intake than a shot putter during competition. [3]

.....

.....

.....

.....

.....

.....

(Option D continues on the following page)



20EP19

Turn over

(Option D continued)

17. (a) List **two** sources of protein for a vegetarian athlete. [2]

.....

.....

.....

.....

(b) Outline the possible harmful effects of excessive protein in a person's diet. [3]

.....

.....

.....

.....

.....

.....

End of Option D

Disclaimer:

Content used in IB assessments is taken from authentic, third-party sources. The views expressed within them belong to their individual authors and/or publishers and do not necessarily reflect the views of the IB.

References:

Figure 2 Used with permission of Elsevier, from Bone structure of adolescent swimmers; a peripheral quantitative computed tomography (pQCT) study. Gómez-Bruton, A. González-Agüero, A. Gómez-Cabello, A. Matute-Llorente, B.S. Zemel, L.A. Moreno, J.A. Casajús, G. Vicente-Rodríguez, *Journal of Science and Medicine in Sport*, 19, 2016; permission conveyed through Copyright Clearance Center, Inc.

Figures 3(a) and 3(b) Used with permission of Elsevier, from Effect of induced alkalosis on performance during a field-simulated BMX cycling competition. Ana B. Peinado, Darías Holgado, Antonio Luque-Casado, Miguel A. Rojo-Tirado, Daniel Sanabria, Coral González, Manuel Mateo-March, Cristóbal Sánchez-Muñoz, Francisco J. Calderón, Mikel Zabala, *Journal of science and medicine in sport*, volume 22, edition 3, 2019; permission conveyed through Copyright Clearance Center, Inc.

All other texts, graphics and illustrations © International Baccalaureate Organization 2023

